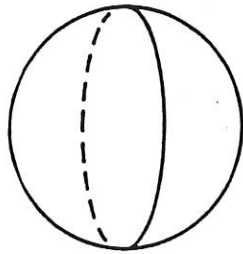


What Did the Taxi Driver Say About His Daughter?

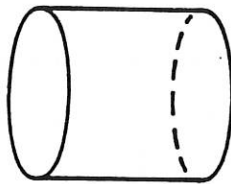
Write the name that best describes each space figure. Then find your answer in the answer column. Write the letter of the answer in the box containing the number of the exercise.

6	4	9	2	11	5	7	10	1	12	8	3
---	---	---	---	----	---	---	----	---	----	---	---

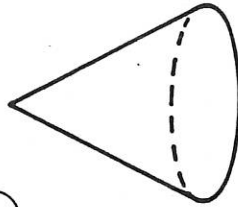
1



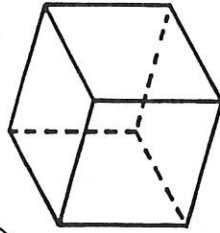
2



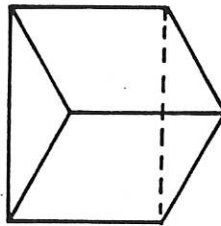
3



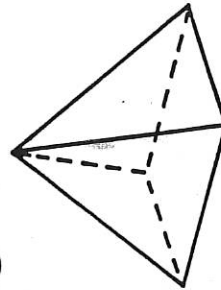
4



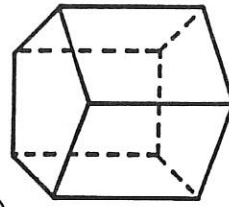
5



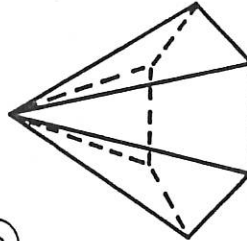
6



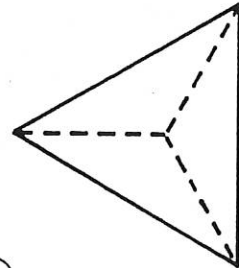
7



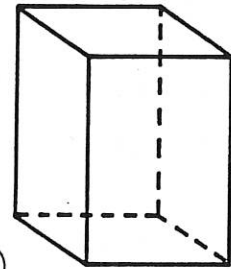
8



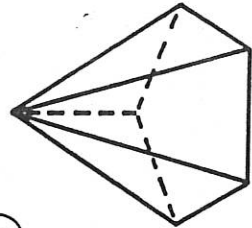
9



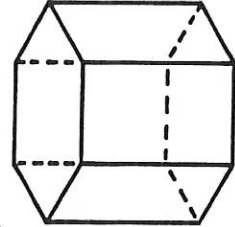
10



11



12



U

triangular pyramid

T

hexagonal prism

R

cone

T

triangular prism

E

sphere

M

rectangular prism

O

pentagonal prism

O

cube

U

pentagonal pyramid

A

cylinder

E

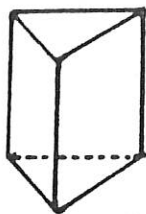
hexagonal pyramid

Y

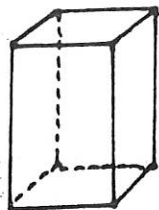
rectangular pyramid

WHAT'S THE SPACE FIGURE?

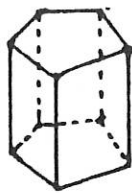
Name _____



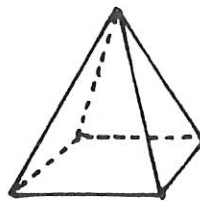
Triangular
Prism



Rectangular
Prism



Pentagonal
Prism



Rectangular
Pyramid



Pentagonal
Pyramid

Use the clues to name the space figure.

1. Clues:

- This space figure is a prism
- It has 6 vertices.

The space figure is a _____
_____.

3. Clues:

- It is a prism.
- It has an odd number of faces.
- It has more than 10 edges.

The space figure is a _____
_____.

5. Clues:

- It has rectangular faces.
- It has an even number of edges.
- It has more than 10 edges.

The space figure is a _____
_____.

7. Clues:

- It is a prism.
- It has an odd number of edges.
- It has more than 10 edges.

The space figure is a _____
_____.

2. Clues:

- This space figure is a pyramid.
- It has a rectangular face.

The space figure is a _____
_____.

4. Clues:

- It has triangular faces.
- It has an even number of vertices.
- It has less than 10 edges.

The space figure is a _____
_____.

6. Clues:

- It has triangular faces.
- It is a pyramid.
- It has an odd number of faces.

The space figure is a _____
_____.

8. Clues:

- It has an even number of edges.
- It has an even number of vertices.
- It has triangular faces.

The space figure is a _____
_____.