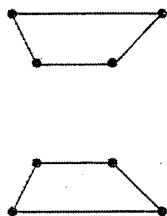


Practice B

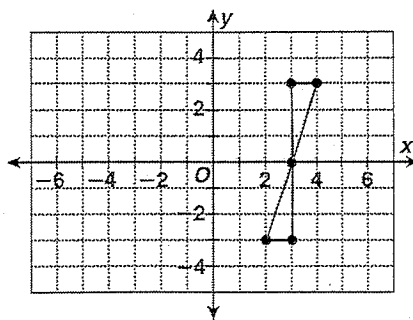
Translations, Reflections, and Rotations

Identify each type of transformation.

1.

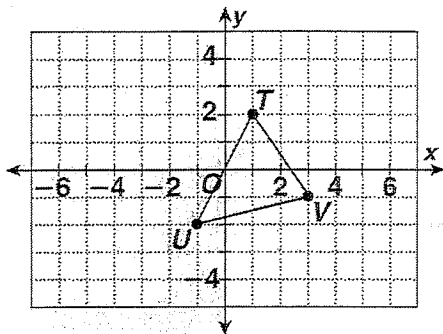


2.

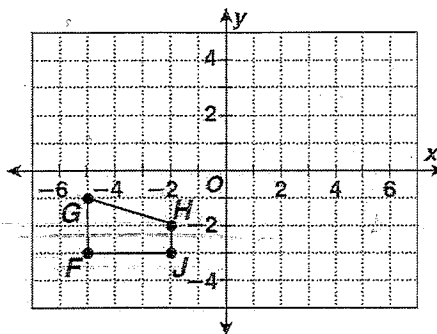


Graph each translation.

3. 5 units to the left and 2 units up

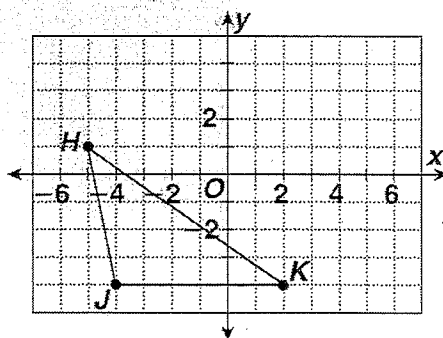


4. 4 units to the right and 3 units up

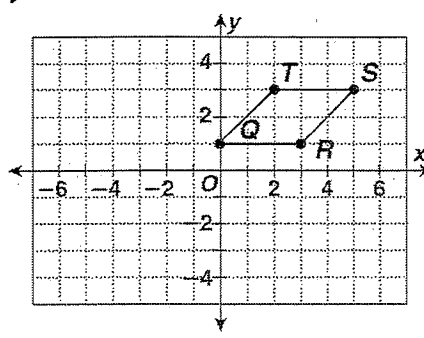


Graph the reflection of each figure across the indicated axis. Write the coordinates of the vertices of each image.

5. x-axis



6. y-axis



7. Triangle DEF has vertices at $D(0, 0)$, $E(-2, -3)$, and $F(-5, -3)$. Rotate $\triangle DEF$ 90° clockwise about the vertex D . Write the coordinates of the vertices of the image.

