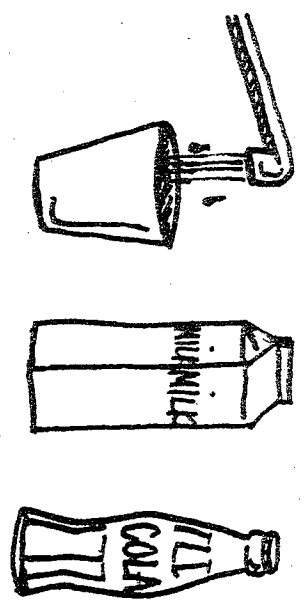


WHAT DOES THE INVISIBLE MAN DRINK AT SNACKTIME?

Directions: Find the missing factor in each set of numbers. Each time the factor appears in the decoder, write the letter above the appropriate space.

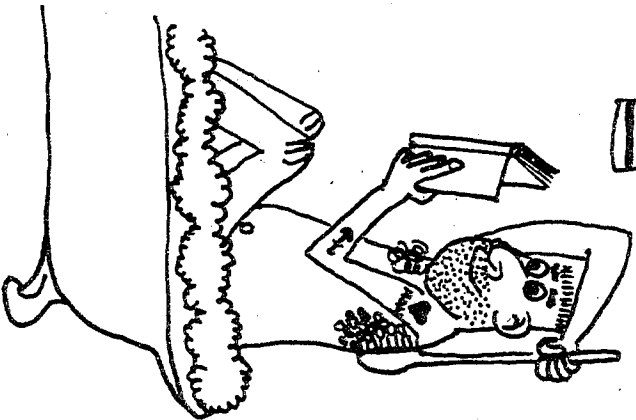



<p>FACTORS OF 16: {1, 4, 8, 16, L} L =</p>	<p>FACTORS OF 36: {1, 2, 3, 4, 9, 12, 18, 36, A} A =</p>
<p>FACTORS OF 20: {1, 2, 4, 10, 20, T} T =</p>	<p>FACTORS OF 32: {1, 2, 4, 8, 32, D} D =</p>
<p>FACTORS OF 26: {1, 2, 26, R} R =</p>	<p>FACTORS OF 70: {1, 2, 5, 7, 10, 14, 70, I} I =</p>
<p>FACTORS OF 15: {3, 5, 15, M} M =</p>	<p>FACTORS OF 72: {1, 2, 3, 4, 6, 8, 12, 18, 24, 36, 72, K} K =</p>
<p>FACTORS OF 60: {1, 2, 3, 4, 5, 6, 10, 12, 20, 30, 60, P} P =</p>	<p>FACTORS OF 48: {1, 2, 3, 4, 6, 8, 12, 16, 48, V} V =</p>
<p>FACTORS OF 22: {1, 2, 22, O} O =</p>	<p>FACTORS OF 12: {1, 2, 3, 6, 12, E} E =</p>

4 24 6 15 11 13 6 5 4 16 1 35 2 9

WHO ARE THE SLOWEST TALKERS IN THE WHOLE WORLD?

DIRECTIONS: Figure out the *greatest common factor (GCF)* for each pair of numbers. Each time the greatest common factor occurs in the decoder, place the letter of the GFC in the appropriate space.



- | | | | |
|------------------------------|---|------------------------------|---|
| 1. GCF of 10 and 15 = _____ | Y | 10. GCF of 12 and 24 = _____ | P |
| 2. GCF of 12 and 16 = _____ | I | 11. GCF of 6 and 8 = _____ | G |
| 3. GCF of 50 and 75 = _____ | R | 12. GCF of 21 and 36 = _____ | 2 |
| 4. GCF of 16 and 48 = _____ | E | 13. GCF of 7 and 14 = _____ | V |
| 5. GCF of 50 and 100 = _____ | D | 14. GCF of 6 and 12 = _____ | 5 |
| 6. GCF of 30 and 70 = _____ | H | 15. GCF of 24 and 72 = _____ | L |
| 7. GCF of 17 and 34 = _____ | A | 16. GCF of 18 and 27 = _____ | O |
| 8. GCF of 11 and 22 = _____ | N | 17. GCF of 24 and 64 = _____ | T |
| 9. GCF of 15 and 60 = _____ | S | 18. GCF of 21 and 22 = _____ | C |
-
- | | | | | | | | | | | | |
|----|----|----|----|----|----|---|----|----|----|----|----|
| 1 | 9 | 11 | 7 | 4 | 1 | 8 | 15 | 8 | 10 | 16 | 5 |
| 15 | 12 | 16 | 11 | 50 | 3 | 6 | 5 | 16 | 17 | 25 | 15 |
| 9 | 11 | 17 | 15 | 4 | 11 | 2 | 24 | 16 | | | |
| 15 | 16 | 11 | 8 | 16 | 11 | 1 | 16 | | | | |