

# Practice B

## Symmetry

Draw all the lines of symmetry in each figure.

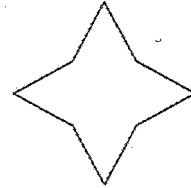
1.



2.




3.




Tell how many lines of symmetry each flag has.


4. Scotland



5. Thailand

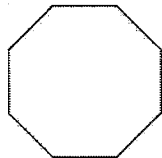


6. Chile



Decide whether each figure has line symmetry. If it does, draw all the lines of symmetry.

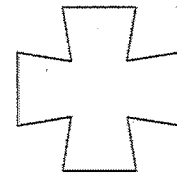
7.



8.




9.

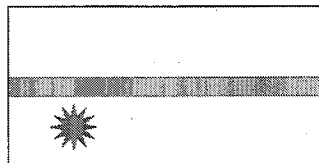


Find and draw all the lines of symmetry in each flag.


10. Iceland



11. Nauru



12. Burundi



13-15 ON BACK!

Decide whether each figure has line symmetry. If it does, draw all the lines of symmetry.

13.



14.



15.

